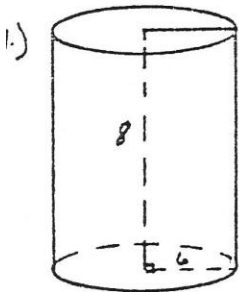
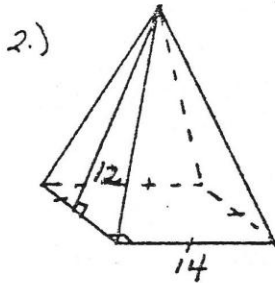


HIDDEN MESSAGE FOR CYLINDERS, PYRAMIDS AND CONES

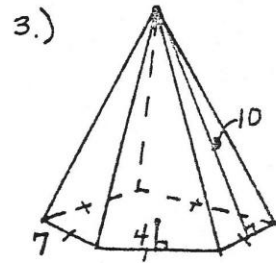
1. Work each problem and find your answer in the array on the next page. Correct answers read from left to right.
2. Cross out each correct answer. There will be 24 numbers and letters not crossed out when you are finished.
3. Starting on the top line, copy the remaining letters into the spaces at the bottom of the page. The hidden message will appear.



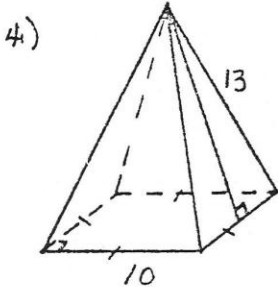
L.A. = _____
T.A. = _____



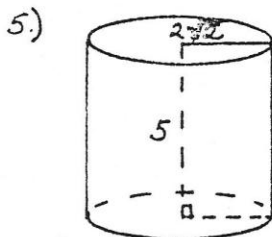
L.A. = _____



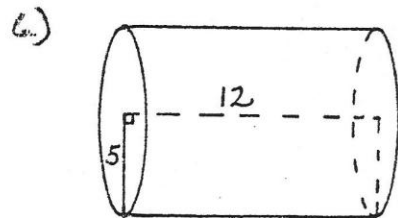
T.A. = _____



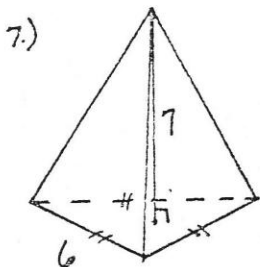
T.A. = _____



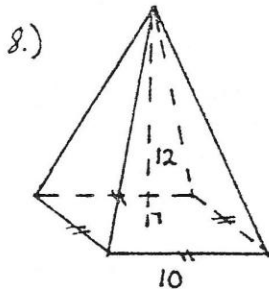
V = _____



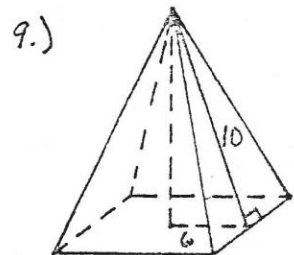
T.A. = _____



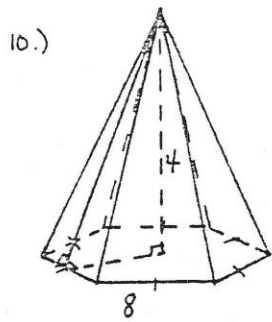
V = _____



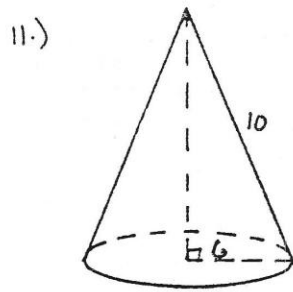
T.A. = _____



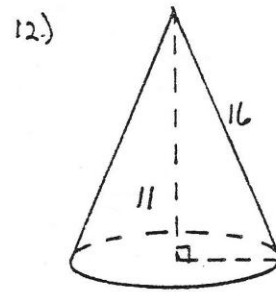
V = _____



T.A. = _____



V = _____



V = _____

W O P A B D E S T R A P C O K E D F J N P Q S
 9 6 π 5 4 1 6 8 π 2 3 3 6 1 4 π 2 4 5 6 3 4 0

A T U R N G V A G B L E H C F I S G M K A R P
 $\sqrt{3}$ 4 0 π 5 6 1 7 0 π 2 π 2 1 $\sqrt{3}$ 5 7 3 6 0 1 $\sqrt{2}$ 3

S E D J N T H O C T U B M A N C E W Q G L E
 8 4 1 9 2 9 6 $\sqrt{3}$ 8 $\sqrt{3}$ 9 6 π 1 3 4 9 5 π 8 8 7

